

注意：

允許學生個人、非營利性的圖書館或公立學校合理使用本基金會網站所提供之各項試題及其解答。可直接下載而不須申請。

重版、系統地複製或大量重製這些資料的任何部分，必須獲得財團法人臺北市九章數學教育基金會的授權許可。

申請此項授權請電郵 ccmp@seed.net.tw

Notice:

Individual students, nonprofit libraries, or schools are permitted to make fair use of the papers and its solutions. Republication, systematic copying, or multiple reproduction of any part of this material is permitted only under license from the Chiuchang Mathematics Foundation.

Requests for such permission should be made by e-mailing Mr. Wen-Hsien SUN ccmp@seed.net.tw

Junior Division Round 2

Questions 1 to 5, 4 marks each

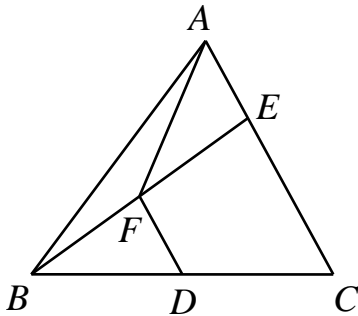
1. Which of the following expressions is equal to

$$(a+1)(b-1) + (b+1)(c-1) + (c+1)(a-1)?$$

- (A) $ab + bc + ca - 3$ (B) $ab + bc + ca$
(C) $ab + bc + ca + 2a + 2b + 2c + 3$ (D) $ab + bc + ca - 2a - 2b - 2c - 3$
(E) $ab + bc + ca - 2a - 2b - 2c + 3$

Answer : _____

2. In triangle ABC , D is the midpoint of BC . E is an arbitrary point on CA , and F is the midpoint of BE . If the area of triangle ABC is 120 cm^2 and the area of the quadrilateral $AFDC$ is 80 cm^2 , what is the area, in cm^2 , of triangle BDF ?
- (A) 10 cm^2 (B) 15 cm^2 (C) 17.5 cm^2 (D) 20 cm^2 (E) 25 cm^2



Answer : _____

3. Let m be a positive integer such that m^3 can be expressed as a sum of m consecutive odd integers. For instance, $2^3 = 3 + 5$, $3^3 = 7 + 9 + 11$ and $4^3 = 13 + 15 + 17 + 19$. If 999 is one of the consecutive odd integers in the expression for m^3 , what is the value of m ?
- (A) 30 (B) 31 (C) 32 (D) 33 (E) 34

Answer : _____

4. The perimeter of an equilateral triangle is a cm while the perimeter of a square is b cm. If the area of the square is half the area of the triangle, what is the value of $\frac{a^2}{b^2}$?

(A) $\frac{3\sqrt{3}}{8}$ (B) $\frac{3\sqrt{3}}{4}$ (C) $\frac{3\sqrt{3}}{2}$ (D) $\frac{3\sqrt{3}}{3}$ (E) $6\sqrt{3}$

Answer : _____

5. Mindy has two boxes, containing 0 and n pieces of candy respectively, where n is a positive integer. She adds 4, 3 and 2 pieces of candy to one of the boxes in that order, always adding to the box containing fewer pieces of candies. If the two boxes have the same number of pieces of candy, then she adds to either of them. In the end, there is 1 more piece of candy in one box than in the other. How many possible values of n are there?

(A) 2 (B) 3 (C) 4 (D) 5 (E) 6

Answer : _____

Questions 6 to 13, 5 marks each

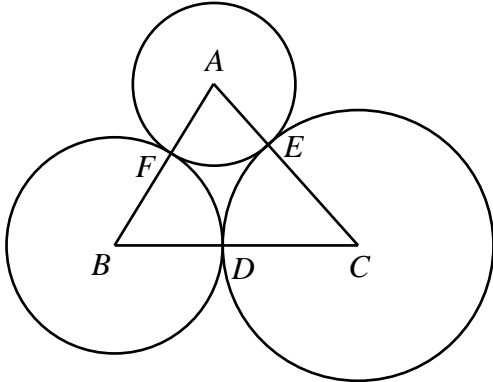
6. Let a , b and c be real numbers such that $x^2 + 5x - 3$ is one of the factors of the polynomial $x^3 + ax^2 + bx + c$. What is the numerical value of $a + b + 2c$?

Answer : _____

7. How many triples of integers (x, y, z) are such that $|xyz| = 6$?

Answer : _____

8. In triangle ABC , $AB = 7$ cm, $AC = 8$ cm and $BC = 9$ cm. A circle with centre A intersects AB at F and AC at E . The circles with centres B and C and radii BF and CE , respectively, are tangent to each other at a point D on BC . What is the total area, in cm^2 , of these three circles? (Taking $\pi = 3.14$)



Answer : _____ cm^2

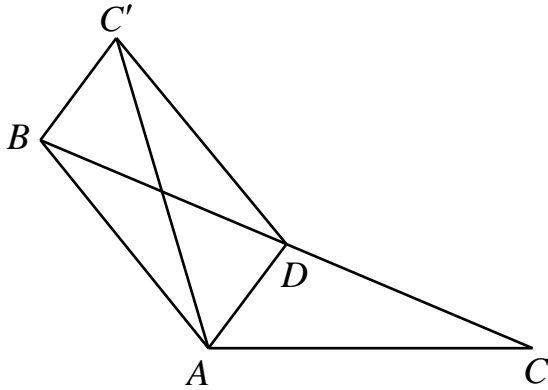
9. There are 2 counters in the first row, and each subsequent row has one more counter than the preceding row. If there are 2015 counters altogether, how many rows of counters are there?

Answer : _____ rows

10. In a book fair, the organizers give a book to each participant. Each male participant gives every other male participant a book, and each female participant gives every other female participant a book. If the total number of books received by the male participants is 31 more than the total number of books received by the female participants, how many participants are there altogether?

Answer : _____ participants

11. D is a point on the side BC of triangle ABC such that $\angle BAD = 76^\circ$. When the point C is reflected across AD to the point C' , $ABC'D$ is a parallelogram. What is the measure, in degrees, of $\angle ADC$?



○
Answer : _____

12. Let k be a non-zero integer such that the equation $x + \frac{9k^2 - 81}{x} = 10k$ has two distinct integer roots. What is the difference when the smaller root is subtracted from the larger one?

Answer : _____

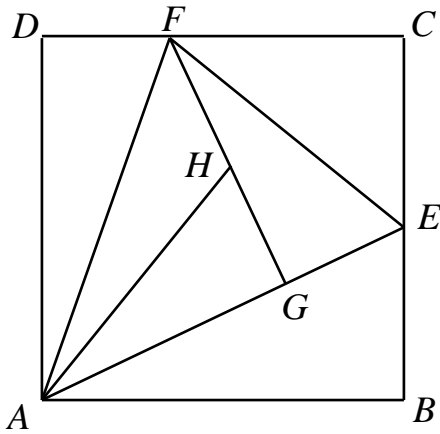
13. The integers $1, 2, 3, \dots, 20$ are divided into two groups. The sum of all the numbers in one group is n , while the product of all the numbers in the other group is also n . What is the maximum value of n ?

Answer : _____

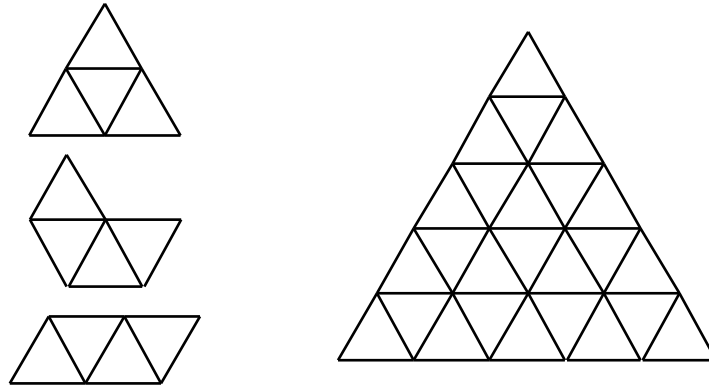
Questions 14 to 15, 20 marks each

Detailed solutions are needed for these two problems

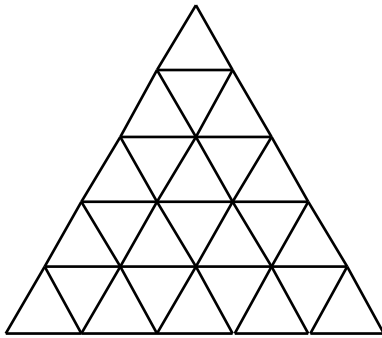
14. E is a point on the side BC and F is a point on the side CD of a square $ABCD$ such that the perimeter of triangle CEF is equal to half the perimeter of $ABCD$. G is the point on AE such that FG is perpendicular to AE , and H is the point on FG such that $AH = EF$. Prove that AH is perpendicular to EF .



15. Each side of an equilateral triangle is divided into 5 equal parts by 4 points, and these points are joined by lines parallel to the sides of the triangle, dividing into 25 small equilateral triangles. A tetriamond is a shape formed of 4 small equilateral triangles joined edge to edge. There are three tetriamonds as shown in the diagram below on the left.



- (a) Show that if 7 of the small triangles are painted, then it may be impossible to fit any tetriamond inside the large triangle without covering up any part of the painted small triangles. (4 marks)



- (b) Prove that if 6 of the small triangles are painted, then it is always possible to fit a tetriamond inside the large triangle without covering up any part of the painted small triangles. (16 marks)

