

注意：

允許學生個人、非營利性的圖書館或公立學校合理使用本基金會網站所提供之各項試題及其解答。可直接下載而不須申請。

重版、系統地複製或大量重製這些資料的任何部分，必須獲得財團法人臺北市九章數學教育基金會的授權許可。

申請此項授權請電郵 ccmp@seed.net.tw

Notice:

Individual students, nonprofit libraries, or schools are permitted to make fair use of the papers and its solutions. Republication, systematic copying, or multiple reproduction of any part of this material is permitted only under license from the Chiuchang Mathematics Foundation.

Requests for such permission should be made by e-mailing Mr. Wen-Hsien SUN ccmp@seed.net.tw

International Young Mathematicians' Convention (IYMC) 2012 Team Contest –Junior level



Time : 60 minutes

Instructions:

- Do not turn to the first page until you are told to do so.
- Remember to write down your team name in the space indicated on every page.
- There are 6 problems in the Team Contest, arranged in increasing order of difficulty. Each question is printed on a separate sheet of paper. Each problem is worth 40 points and complete solutions of all problems are required for full credits. Partial credits may be awarded. In case the spaces provided in each problem are not enough, you may continue your work at the back page of the paper.
- The three team members are allowed 10 minutes to discuss and distribute the problems among themselves. Each student must attempt at least one problem. Each will then have 50 minutes to write the solutions of their allotted problem independently with no further discussion or exchange of problems.
- No calculator or calculating device or electronic devices are allowed.
- Answer must be in pencil or in blue or black ball point pen.
- All papers shall be collected at the end of this test.

Team Code

For Juries Use Only

No.	1	2	3	4	5	6	Total
Score							
Sign by Jury							
Score							
Sign by Jury							

International Young Mathematicians' Convention (IYMC) 2012 Team Contest –Junior level



Team Name _____ *Score* _____

1. A simple tune consists of the following 12 notes in the order:

C, E, E, E, G, G, D, F, F, A, B, B



How many different tunes can be made with the same 12 notes?

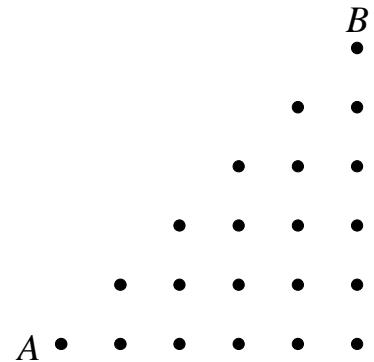
ANSWER: _____ **tunes**

International Young Mathematicians' Convention (IYMC) 2012 Team Contest –Junior level



Team Name _____ *Score* _____

2. Any two adjacent dots in the diagram are 1 unit from each other. A path consists of horizontal and vertical segments between the dots joined end to end. How many paths from point A to point B are there with length 10 units?



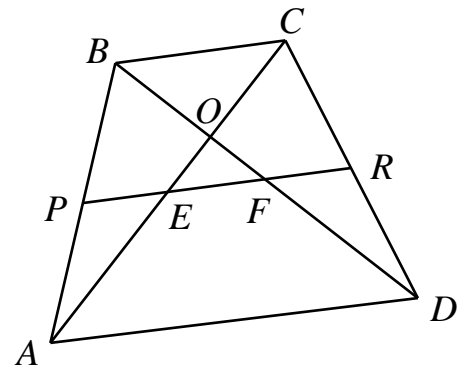
ANSWER: _____ *paths*

***International Young
Mathematicians' Convention (IYMC)
2012 Team Contest –Junior level***



Team Name _____ Score _____

3. In the figure, $ABCD$ is a quadrilateral. If $AP=BP$, $CR=DR$ and $\angle OEF = \angle OFE$, prove that $AC=BD$.



*International Young
Mathematicians' Convention (IYMC)
2012 Team Contest –Junior level*



Team Name _____ *Score* _____

4. How many different ordered triples (a,b,c) of positive integers satisfy

$$\left(\frac{a}{c} + \frac{a}{b} + 1\right) \div \left(\frac{b}{a} + \frac{b}{c} + 1\right) = 11 \quad \text{and} \quad a + 2b + c \leq 50?$$

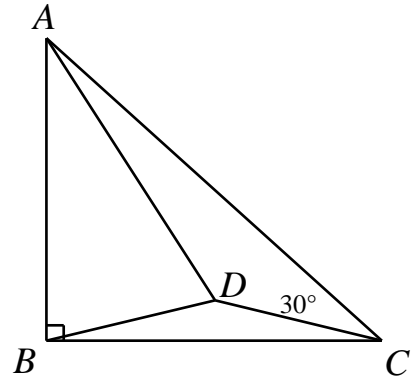
ANSWER: _____

*International Young
Mathematicians' Convention (IYMC)
2012 Team Contest –Junior level*



Team Name _____ Score _____

5. In the figure, $AB=BC$ and $\angle B = 90^\circ$. If D is a point inside $\triangle ABC$ such that $BD=CD$ and $\angle ACD = 30^\circ$. What is the measure of $\angle ADB$, in degree?



○

ANSWER: _____

*International Young
Mathematicians' Convention (IYMC)
2012 Team Contest –Junior level*



Team Name _____ *Score* _____

6. If
$$\begin{cases} a+b+c=7 \\ a^2+b^2+c^2=21 \\ a^3+b^3+c^3=73 \end{cases}$$
, what is the value of $a^4+b^4+c^4$?

ANSWER: _____