

注意：

允許學生個人、非營利性的圖書館或公立學校合理使用本基金會網站所提供之各項試題及其解答。可直接下載而不須申請。

重版、系統地複製或大量重製這些資料的任何部分，必須獲得財團法人臺北市九章數學教育基金會的授權許可。

申請此項授權請電郵 [ccmp@seed.net.tw](mailto:ccmp@seed.net.tw)

**Notice:**

**Individual students, nonprofit libraries, or schools are permitted to make fair use of the papers and its solutions. Republication, systematic copying, or multiple reproduction of any part of this material is permitted only under license from the Chiuchang Mathematics Foundation.**

**Requests for such permission should be made by e-mailing Mr. Wen-Hsien SUN [ccmp@seed.net.tw](mailto:ccmp@seed.net.tw)**

---

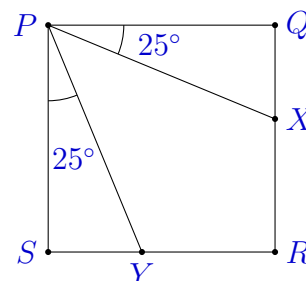
## Senior Division

---

### Questions 1 to 10, 3 marks each

1. In the diagram,  $PQRS$  is a square. What is the size of  $\angle XPY$ ?

(A)  $25^\circ$                       (B)  $30^\circ$                       (C)  $35^\circ$   
(D)  $40^\circ$                       (E)  $45^\circ$



- 
2. The *Great North Walk* is a 250 km long trail from Sydney to Newcastle. If you want to complete it in 8 days, approximately how far do you need to walk each day?

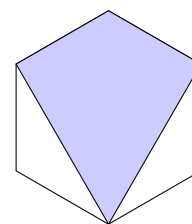
(A) 15 km              (B) 20 km              (C) 30 km              (D) 40 km              (E) 80 km

- 
3. Half of a number is 32. What is twice the number?

(A) 16              (B) 32              (C) 64              (D) 128              (E) 256

- 
4. What fraction of this regular hexagon is shaded?

(A)  $\frac{1}{2}$               (B)  $\frac{2}{3}$               (C)  $\frac{3}{4}$               (D)  $\frac{3}{5}$               (E)  $\frac{4}{5}$



- 
5. The value of  $9 \times 1.2345 - 9 \times 0.1234$  is

(A) 9.9999              (B) 9              (C) 9.0909              (D) 10.909              (E) 11.1111

- 
6. What is  $2^0 - 1^8$ ?

(A) 0              (B) 1              (C) 2              (D) 3              (E) 10

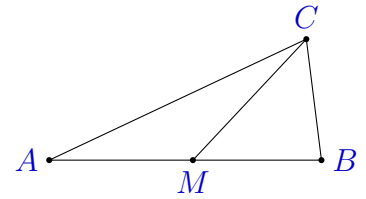
---

7. 1000% of a number is 100. What is the number?  
 (A) 0.1                      (B) 1                      (C) 10                      (D) 100                      (E) 1000

8. The cost of feeding four dogs for three days is \$60. Using the same food costs per dog per day, what would be the cost of feeding seven dogs for seven days?  
 (A) \$140                      (B) \$200                      (C) \$245                      (D) \$350                      (E) \$420

9. In the triangle  $ABC$ ,  $M$  is the midpoint of  $AB$ .  
 Which one of the following statements must be true?

- (A)  $\angle CAM = \angle ACM$                       (B)  $\angle CMB = 2\angle CAM$   
 (C)  $AC = 2BC$                       (D)  $CM = BC$   
 (E) Area  $\triangle AMC = \text{Area } \triangle MBC$



10. The sum of the numbers from 1 to 100 is 5050. What is the sum of the numbers from 101 to 200?  
 (A) 15 050                      (B) 50 500                      (C) 51 500                      (D) 150 500                      (E) 505 000

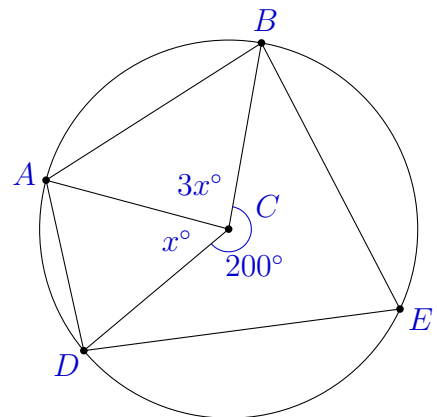
**Questions 11 to 20, 4 marks each**

11. Leila has a number of identical equilateral triangle shaped tiles. How many of these must she put together in a row (edge to edge) to create a shape which has a perimeter ten times that of a single tile?  
 (A) 14                      (B) 20                      (C) 25                      (D) 28                      (E) 30

12. In the circle shown,  $C$  is the centre and  $A$ ,  $B$ ,  $D$  and  $E$  all lie on the circumference.  
 Reflex  $\angle BCD = 200^\circ$ ,  $\angle DCA = x^\circ$  and  $\angle BCA = 3x^\circ$  as shown.

The ratio of  $\angle DAC : \angle BAC$  is

- (A) 3 : 1                      (B) 5 : 2                      (C) 8 : 3  
 (D) 7 : 4                      (E) 7 : 3

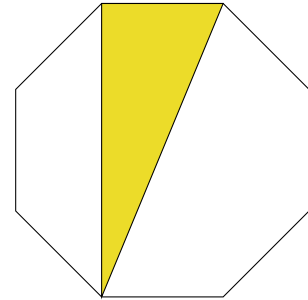


13. Instead of multiplying a number by 4 and then subtracting 330, I accidentally divided that number by 4 and then added 330. Luckily, my final answer was correct. What was the original number?

(A) 220                      (B) 990                      (C) 144                      (D) 374                      (E) 176

14. The diagram shows a regular octagon of side length 1 metre. In square metres, what is the area of the shaded region?

(A) 1                      (B)  $\sqrt{2}$                       (C) 2  
 (D)  $3 - \sqrt{2}$                       (E)  $\frac{1 + \sqrt{2}}{2}$



15. A netball coach is planning a train trip for players from her two netball clubs, Panthers and Warriors.

The two clubs are in different towns, so the train fares per player are different. For the same cost she can either take 6 Panthers and 7 Warriors or she can take 8 Panthers and 4 Warriors.

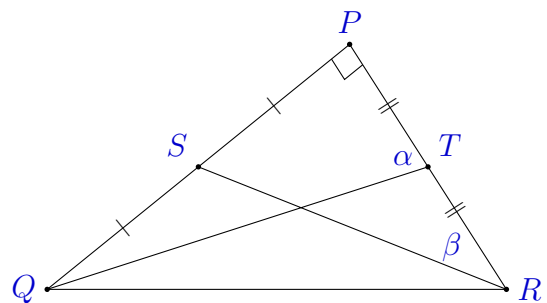
If she takes only members of the Warriors on the train journey, the number she could take for the same cost is

(A) 11                      (B) 13                      (C) 16                      (D) 20                      (E) 25

16. The triangle  $PQR$  shown has a right angle at  $P$ . Points  $T$  and  $S$  are the midpoints of the sides  $PR$  and  $PQ$ , respectively. Also  $\angle QTP = \alpha$  and  $\angle SRP = \beta$ .

The ratio  $\tan \alpha : \tan \beta$  equals

(A) 3 : 1                      (B) 4 : 1                      (C) 5 : 1  
 (D) 7 : 2                      (E) 9 : 2



17. Three fair 6-sided dice are thrown. What is the probability that the three numbers rolled are three consecutive numbers, in some order?

(A)  $\frac{1}{6}$                       (B)  $\frac{1}{9}$                       (C)  $\frac{1}{27}$                       (D)  $\frac{7}{36}$                       (E)  $\frac{1}{54}$

18. How many digits does the number  $20^{18}$  have?

(A) 24                      (B) 38                      (C) 18                      (D) 36                      (E) 25

19. In this subtraction, the first number has 100 digits and the second number has 50 digits.

$$\underbrace{111 \dots 111}_{100 \text{ digits}} - \underbrace{222 \dots 222}_{50 \text{ digits}}$$

What is the sum of the digits in the result?

- (A) 375                      (B) 420                      (C) 429                      (D) 450                      (E) 475
- 
20. I have two regular polygons where the larger polygon has 5 sides more than the smaller polygon. The interior angles of the two polygons differ by  $1^\circ$ . How many sides does the larger polygon have?

- (A) 30                      (B) 40                      (C) 45                      (D) 50                      (E) 60
- 

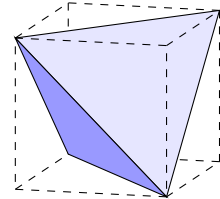
**Questions 21 to 25, 5 marks each**

21. How many solutions  $(m, n)$  exist for the equation  $n = \sqrt{100 - m^2}$  where both  $m$  and  $n$  are integers?

- (A) 4                      (B) 6                      (C) 7                      (D) 8                      (E) 10
- 

22. A tetrahedron is inscribed in a cube of side length 2 as shown. What is the volume of the tetrahedron?

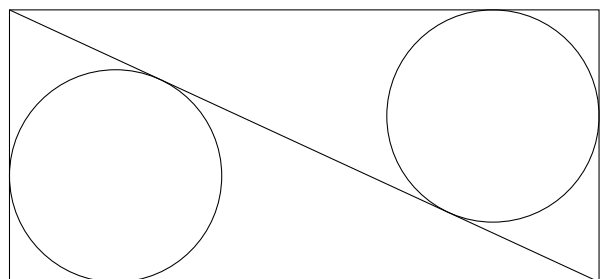
- (A)  $\frac{8}{3}$                       (B) 4                      (C)  $\frac{16}{3}$   
 (D)  $\sqrt{6}$                       (E)  $8 - 2\sqrt{2}$



23. A rectangle has sides of length 5 and 12 units.

A diagonal is drawn and then the largest possible circle is drawn in each of the two triangles.

What is the distance between the centres of these two circles?



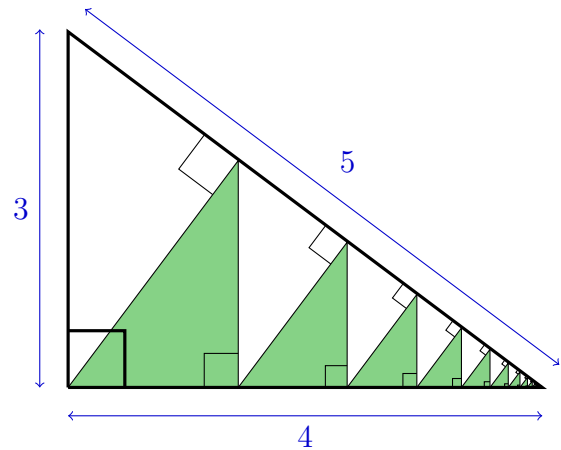
- (A)  $\sqrt{60}$                       (B) 8                      (C)  $\sqrt{65}$                       (D)  $\sqrt{68}$                       (E) 9
-

24. In the equation  $\underbrace{\sqrt{\sqrt{\dots\sqrt{256}}}}_{60} = 2^{(8^x)}$  the value of  $x$  is

- (A)  $-17$                       (B)  $-19$                       (C)  $-21$                       (D)  $-23$                       (E)  $16$

25. A right-angled triangle with sides of length 3, 4 and 5 is tiled by infinitely many right-angled triangles, as shown. What is the shaded area?

- (A)  $\frac{18}{7}$                       (B)  $\frac{54}{25}$                       (C)  $\frac{8}{3}$   
 (D)  $\frac{27}{17}$                       (E)  $\frac{96}{41}$



For questions 26 to 30, shade the answer as an integer from 0 to 999 in the space provided on the answer sheet.

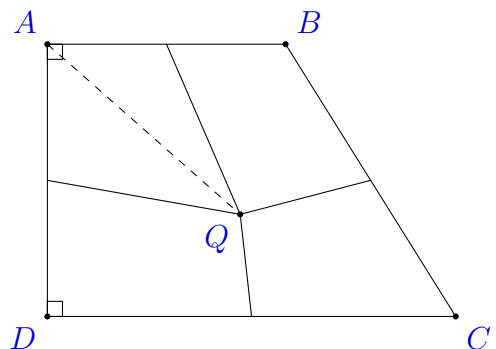
Questions 26–30 are worth 6, 7, 8, 9 and 10 marks, respectively.

26. Let  $A$  be a 2018-digit number which is divisible by 9. Let  $B$  be the sum of all digits of  $A$  and  $C$  be the sum of all digits of  $B$ . Find the sum of all possible values of  $C$ .

27. The trapezium  $ABCD$  has  $AB = 100$ ,  $BC = 130$ ,  $CD = 150$  and  $DA = 120$ , with right angles at  $A$  and  $D$ .

An interior point  $Q$  is joined to the midpoints of all 4 sides. The four quadrilaterals formed have equal areas.


What is the length  $AQ$ ?



28. Donald has a pair of blue shoes, a pair of red shoes, and a pair of white shoes. He wants to put these six shoes side by side in a row. However, Donald wants the left shoe of each pair to be somewhere to the left of the corresponding right shoe. How many ways are there to do this?

29. For  $n \geq 3$ , a pattern can be made by overlapping  $n$  circles, each of circumference 1 unit, so that each circle passes through a central point and the resulting pattern has order- $n$  rotational symmetry.

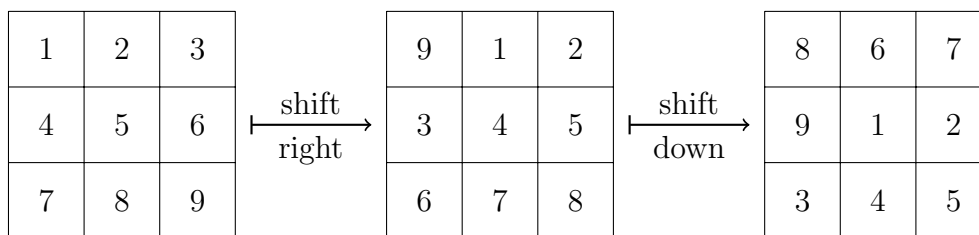
For instance, the diagram shows the pattern where  $n = 7$ . If the total length of visible arcs is 60 units, what is  $n$ ?



30. Consider an  $n \times n$  grid filled with the numbers  $1, \dots, n^2$  in ascending order from left to right, top to bottom. A *shuffle* consists of the following two steps:

- Shift every entry one position to the right. An entry at the end of a row moves to the beginning of the next row and the bottom-right entry moves to the top-left position.
- Then shift every entry down one position. An entry at the bottom of a column moves to the top of the next column and again the bottom-right entry moves to the top-left position.

An example for the  $3 \times 3$  grid is shown. Note that the two steps shown constitute *one* shuffle.



What is the smallest value of  $n$  for which the  $n \times n$  grid requires more than 20 000 shuffles for the numbers to be returned to their original order?