

注意：

允許學生個人、非營利性的圖書館或公立學校合理使用本基金會網站所提供之各項試題及其解答。可直接下載而不須申請。

重版、系統地複製或大量重製這些資料的任何部分，必須獲得財團法人臺北市九章數學教育基金會的授權許可。

申請此項授權請電郵 ccmp@seed.net.tw

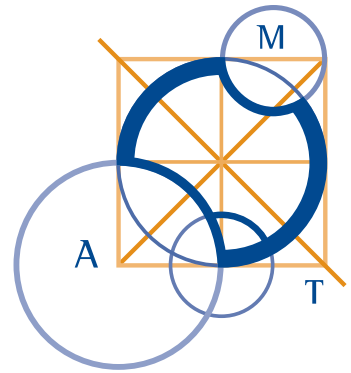
Notice:

Individual students, nonprofit libraries, or schools are permitted to make fair use of the papers and its solutions. Republication, systematic copying, or multiple reproduction of any part of this material is permitted only under license from the Chiuchang Mathematics Foundation.

Requests for such permission should be made by e-mailing Mr. Wen-Hsien SUN ccmp@seed.net.tw

AUSTRALIAN MATHEMATICS COMPETITION

AN ACTIVITY OF THE AUSTRALIAN MATHEMATICS TRUST



THURSDAY 6 AUGUST 2009

UPPER PRIMARY DIVISION COMPETITION PAPER

AUSTRALIAN SCHOOL YEARS 5, 6 AND PRIMARY 7*

TIME ALLOWED: 60 MINUTES

*SOME STATES ONLY

INSTRUCTIONS AND INFORMATION

GENERAL

1. Do not open the booklet until told to do so by your teacher.
2. You may use any teaching aids normally available in your classroom, such as MAB blocks, counters, currency, calculators, play money etc. You are allowed to work on scrap paper and teachers may explain the meaning of words in the paper.
3. Diagrams are NOT drawn to scale. They are intended only as aids.
4. There are 25 multiple-choice questions, each with 5 possible answers given and 5 questions that require a whole number answer between 0 and 999. The questions generally get harder as you work through the paper. There is no penalty for an incorrect response.
5. This is a competition not a test; do not expect to answer all questions. You are only competing against your own year in your own State or Region so different years doing the same paper are not compared.
6. Read the instructions on the **Answer Sheet** carefully. Ensure your name, school name and school year are filled in. It is your responsibility that the Answer Sheet is correctly coded.
7. When your teacher gives the signal, begin working on the problems.

THE ANSWER SHEET

1. Use only lead pencil.
2. Record your answers on the reverse of the Answer Sheet (not on the question paper) by FULLY colouring the circle matching your answer.
3. Your Answer Sheet will be read by a machine. The machine will see all markings even if they are in the wrong places, so please be careful not to doodle or write anything extra on the Answer Sheet. If you want to change an answer or remove any marks, use a plastic eraser and be sure to remove all marks and smudges.

INTEGRITY OF THE COMPETITION

The AMC reserves the right to re-examine students before deciding whether to grant official status to their score.

Upper Primary Division

Questions 1 to 10, 3 marks each

1. For the number below, what number will be obtained if I double the ten-thousands digit and halve the hundreds digit?

$\boxed{2} \boxed{4} \boxed{4} \boxed{2} \boxed{4}$

(A) 28 824 (B) 44 224 (C) 44 824 (D) 14 824 (E) 28 224

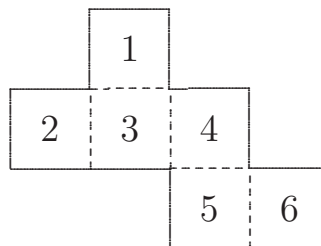
2. When Sam doubled a number and then added 7, it became 33. What was the original number?

(A) 8 (B) 13 (C) 16 (D) 24 (E) 26

3. Which of the following is closest to 1000 seconds?

(A) 1 hour (B) 1 day (C) 45 minutes
(D) 30 minutes (E) 15 minutes

4. The net below is folded to form a cube.




On this cube, what number is on the face opposite the number 6?

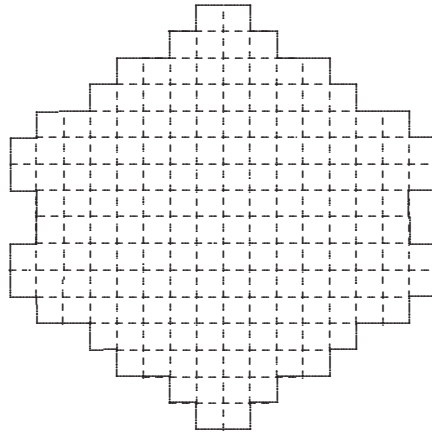
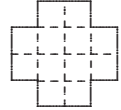
(A) 1 (B) 2 (C) 3 (D) 4 (E) 5

5. What is the angle, in degrees, between the hands of a clock showing 1:20?

(A) 40 (B) 45 (C) 80
(D) 100 (E) 120



6. The following shape was made from blocks that look like this.



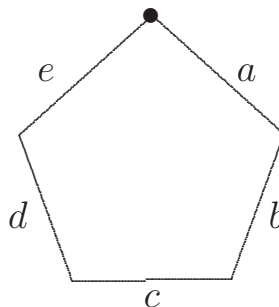
How many blocks were used to create the shape?

- (A) 12 (B) 13 (C) 14 (D) 15 (E) 16

7. The cost for every 15 minutes in a car parking meter is 20c. Jake put a \$1 coin and two 20c coins into the meter at 1:15 pm. At what time did the parking meter expire?

- (A) 2:30 pm (B) 3:00 pm (C) 2:45 pm
 (D) 3:05 pm (E) 3:15 pm

8. Bill walked around this path shaped like a regular pentagon. He started at the dot and walked around clockwise.



On which section of the path was he when he had gone 65% of the way around?

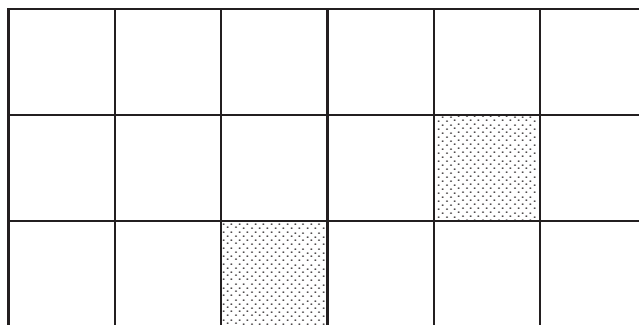
- (A) *a* (B) *b* (C) *c* (D) *d* (E) *e*

UP 3

9. Five cars were travelling at different speeds. From the following speeds, which car was travelling the fastest?

- (A) 1 km per minute (B) 30 km in 20 minutes (C) 50 km/h
(D) 20 km in $\frac{1}{2}$ hour (E) 12 km in 15 minutes
-

10. Some of the squares in the diagram below have been shaded.

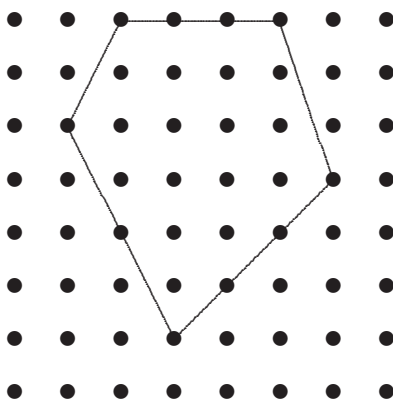


How many **more** squares need to be shaded so that $\frac{5}{9}$ of the diagram is shaded altogether?

- (A) 3 (B) 5 (C) 7 (D) 8 (E) 10
-

Questions 11 to 20, 4 marks each

11. What is the area, in square centimetres, of the shape marked out on the 1-cm grid below?



- (A) 18.5 (B) 19 (C) 19.5 (D) 20 (E) 20.5
-

16. The ages of the three children in the Jones family add up to 14. If their ages are multiplied together, the result is 70. What is the age of the eldest child?

- (A) 5 (B) 7 (C) 8 (D) 10 (E) 14
-

17. We form a rectangle using 24 square tiles, each 1 cm by 1 cm. Which of the following, in centimetres, could **not** be the perimeter?

- (A) 20 (B) 22 (C) 28 (D) 36 (E) 50
-

18. Each of three coloured caps covers one of three objects. The red cap is somewhere to the left of the white cap. The coin is somewhere to the left of the bean. The green cap is somewhere to the right of the shell. The bean is somewhere to the right of the green cap. Which of the following statements is correct?

- (A) The bean is under the red cap.
(B) The bean is under the green cap.
(C) The shell is under the red cap.
(D) The coin is under the white cap.
(E) The shell is under the white cap.
-

19. In an Australian netball competition, these teams are tipped to win Round 1 by three experts:

Expert A: NSW, Queensland, WA, Tasmania

Expert B: SA, Victoria, Queensland, WA

Expert C: NSW, ACT, WA, Victoria

No one tipped the Northern Territory to win.

Which team did Victoria play?

- (A) NSW (B) Tasmania (C) Queensland
(D) WA (E) Northern Territory
-

20. Marcello says to Aiden, “If you give me one of your pencils, I’ll have twice as many pencils as you.”

Aiden answers, “But if you give me one of yours, we’ll have the same number of pencils each.”

How many pencils does Aiden have?

- (A) 1 (B) 2 (C) 3 (D) 4 (E) 5

Questions 21 to 25, 5 marks each

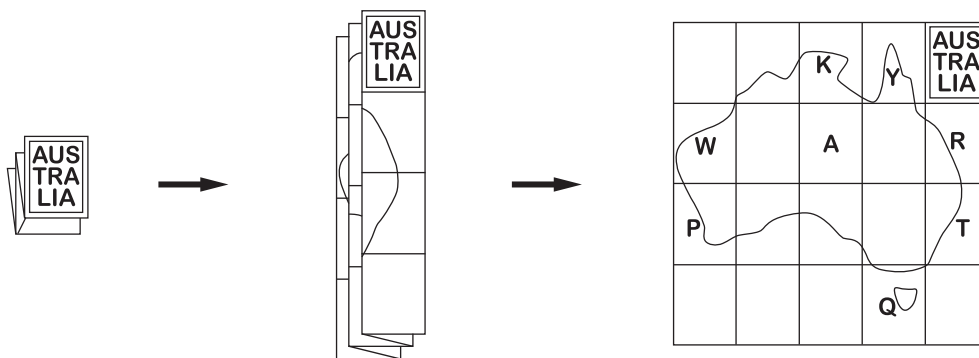
21. A basketball team has won 30 games out of 40 played. How many of the remaining 30 games must it win to have an 80% win record for the season?

- (A) 10 (B) 15 (C) 25 (D) 26 (E) 30

22. A horse trainer has some carrots for the horses. He gives each horse 4 carrots and has 2 carrots left over. If he wants to give each horse 6 carrots, he needs another 22 carrots. How many horses are there in his stables?

- (A) 4 (B) 5 (C) 6 (D) 11 (E) 12

23. I bought a map of Australia, unfolded it and marked 8 places I wanted to visit.



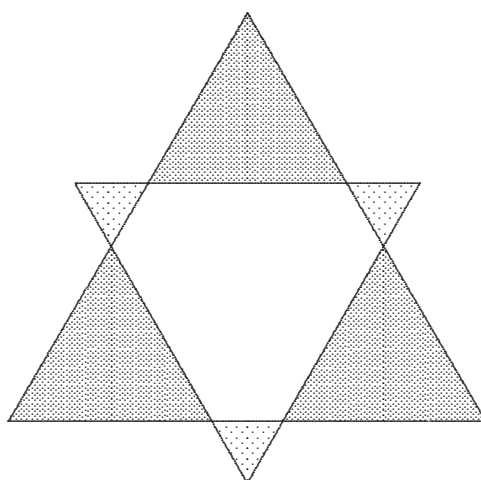
I then refolded the map and placed it back on the table as it was. In what order are my marks stacked from top to bottom?

- (A) RTYQKAWP (B) YKRAWTPQ (C) RTQYKAWP
 (D) YKTPRAWQ (E) YKWARTPQ

For questions 26 to 30, shade the answer as a whole number from 0 to 999 in the space provided on the answer sheet.

Question 26 is 6 marks, question 27 is 7 marks, question 28 is 8 marks, question 29 is 9 marks and question 30 is 10 marks.

26. The star shown is made up of two different-sized equilateral triangles which overlap symmetrically.

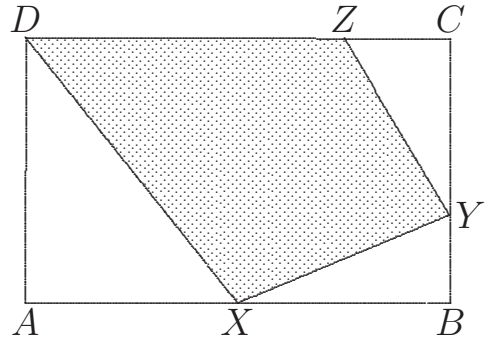


If the lighter-shaded smaller triangles each have an area of 1 square unit and the darker, larger triangles each have an area of 16 square units, what is the total area, in square units, of the whole star?

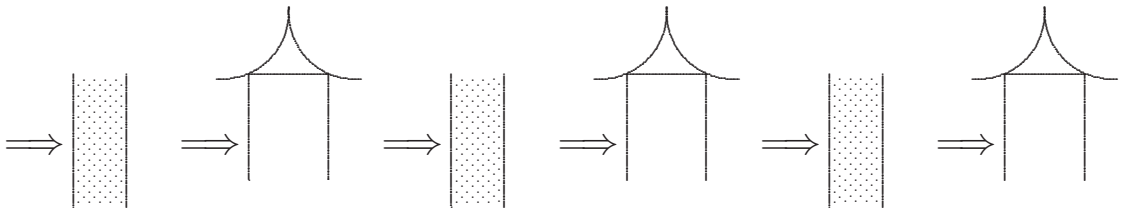
27. A tank is $\frac{1}{6}$ full. When 440 litres of water are added to the tank, it is then $\frac{5}{8}$ full. How many *additional* litres of water are required to fill the tank?
-

28. In a television quiz show, Rachel wins 250 points for a correct answer but loses 150 points for an incorrect answer. Rachel answered 15 questions and obtained 2150 points. How many questions did she get correct?
-

- 29.** $ABCD$ is a rectangle with area 1440 square centimetres. X is halfway along AB , Y is a third of the way along BC , Z is a quarter of the way along CD . In square centimetres, what is the shaded area?



- 30.** Each day Merlin places the same number of flowers (at least one) at three temples. To get to any temple from another he crosses a magic river once. He also has to cross a magic river once to get to the first temple. Each time he crosses a magic river, the number of flowers he has doubles. He has no flowers left when he leaves the third temple. What is the minimum number of flowers he must have at the start?



UPPER PRIMARY DIVISION COMPETITION PAPER

AUSTRALIAN MATHEMATICS TRUST

www.amt.edu.au

